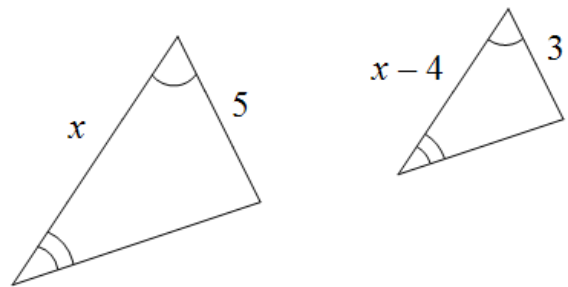


1. Solve $\frac{x-2}{3} = \frac{8}{3x}$.

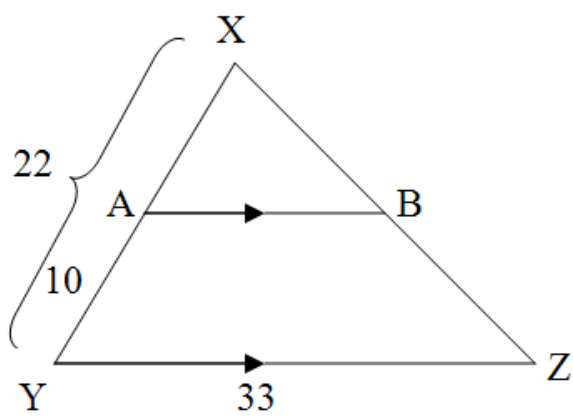
2. TRUE or FALSE? Sides of similar triangles are congruent. If FALSE, change the statement to make it TRUE.

3. The two polygons at the right are similar.
Find the value of x .



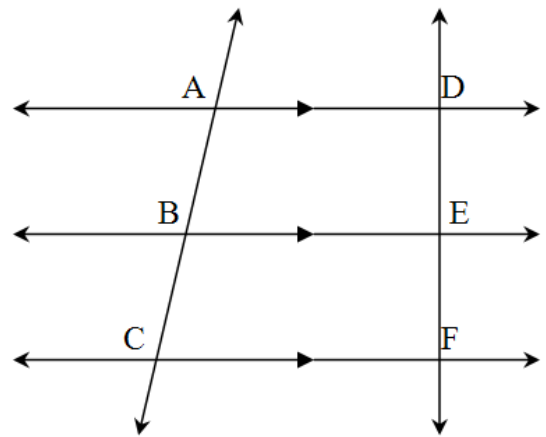
4. If $\triangle ABC \sim \triangle RST$, $AB = 8$, $AC = 9$, and $RT = 15$, find RS .

5. Find AB.



6. In $\triangle RST$, M is the midpt. of \overline{RS} and N is the midpt. of \overline{ST} .
If $RT = 17.8$, find MN.

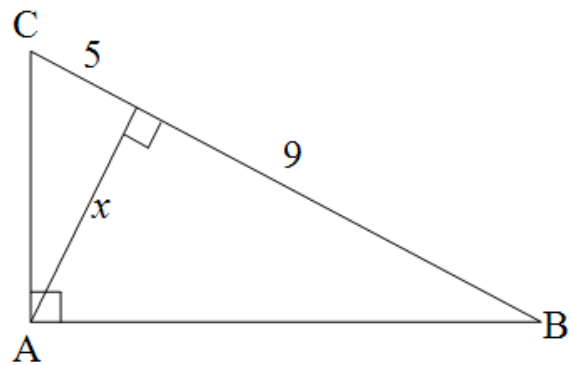
7. If $AC = 16$, $BC = 12$, and $DE = 5$, find EF .



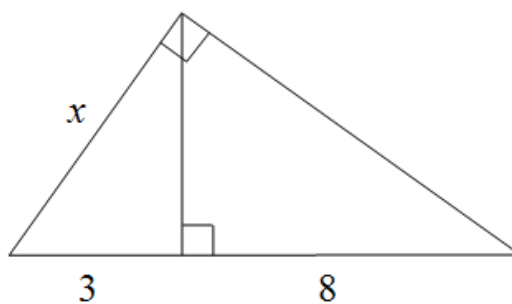
8. $\triangle ABC \sim \triangle DEF$, $AB = 5$, $BC = 6$, $AC = 7$ and $DE = 3$.
Find the perimeter of $\triangle DEF$.

9. Find the geometric mean between 6 and 8. Leave your answer in simplified radical form.

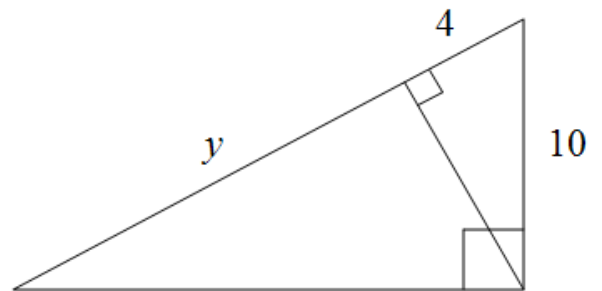
10. Find x in $\triangle ABC$.
Leave your answer in
simplified radical form.



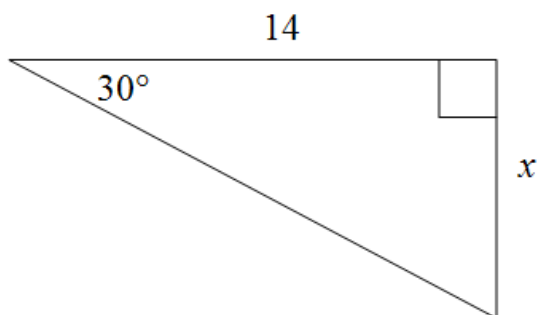
11. Find x . Leave your answer in simplified radical form.



12. Find y .

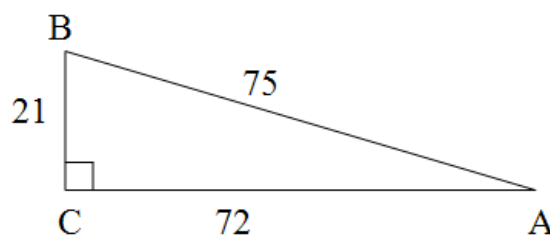


13. Find x .

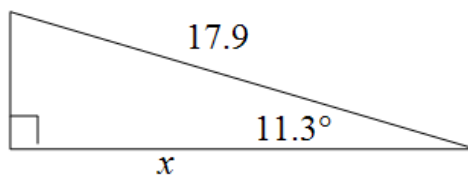


14. The perimeter of an equilateral triangle is 42.
Find the height of the triangle.

15. Find $\tan B$ in $\triangle ABC$.



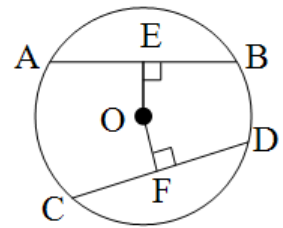
16. Find x to the nearest tenth.



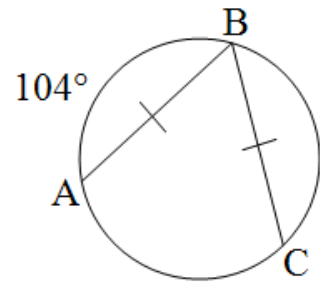
17. A hot air balloon is 121 ft up in the air. A person in the balloon spots his friend on the ground who is 190 ft away from being directly below the balloon. Find the \angle of depression. Round to the nearest tenth.

18. In $\triangle ABC$, $a = 12$, $m\angle B = 68^\circ$, and $m\angle A = 37^\circ$. Find b to the nearest tenth.

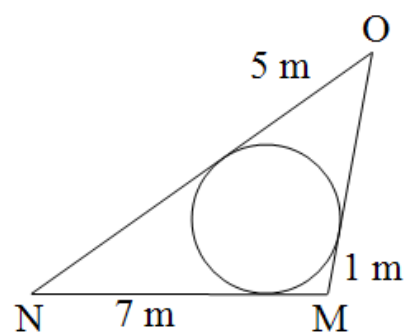
19. If $AB = 16$ cm, $OE = OF$, and $OE = 6$ in circle O , find OD .



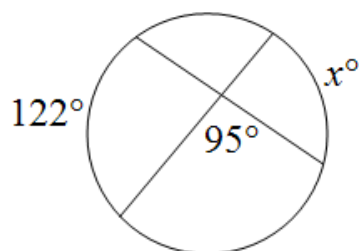
20. Find $m\angle ABC$.



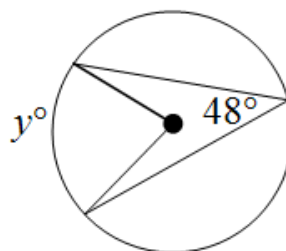
21. If \overline{MN} , \overline{NO} , and \overline{MO} are tangent to circle P, find the perimeter of $\triangle MNO$.



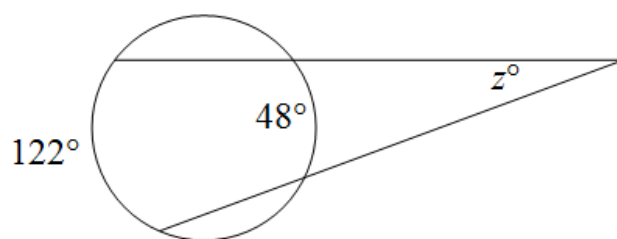
22. Find x .



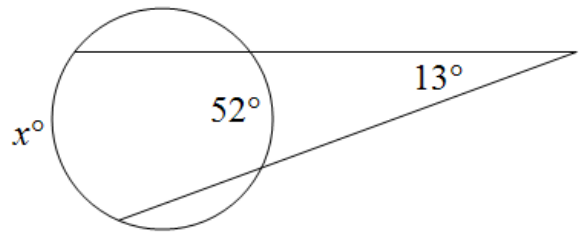
23. In circle O, Find y .



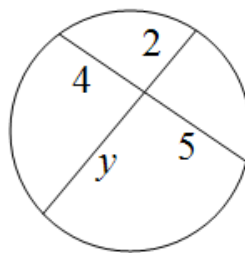
24. Find z .



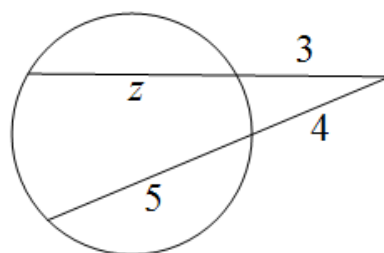
25. Find x .



26. Find y .

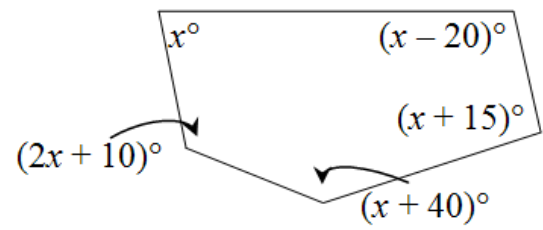


27. Find z .



28. Find the sum of the measures of the interior angles of a convex 32-gon.

29. Find x .

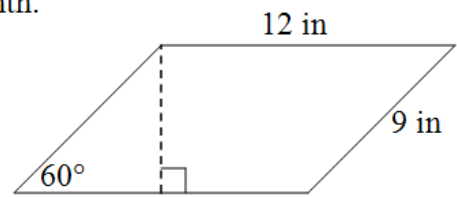


30. Find the sum of measures of the exterior angles of a convex 12-gon.

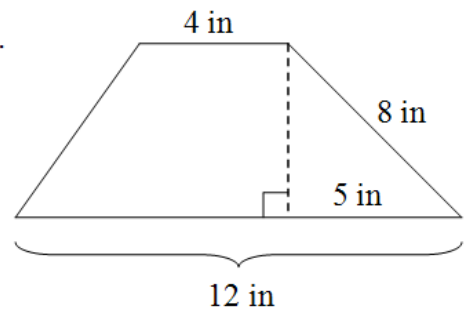
31. Find the measure of one interior angle of a regular 15-gon.

32. How many sides does a regular polygon have if each angle measure is 175° ?

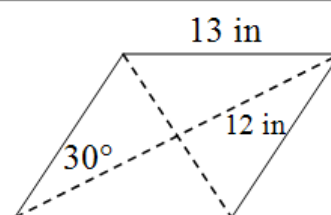
33. Find the area of the following parallelogram, to the nearest tenth.



34. Find the area of the following trapezoid, to the nearest tenth.

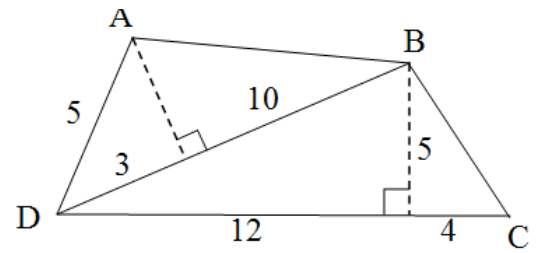


35. Find the area of the following rhombus, to the nearest tenth.



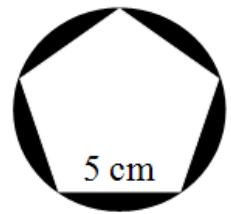
36. Find the area of a regular octagon with a perimeter of 64 cm., to the nearest tenth.

37. Find the area of quad. ABCD.

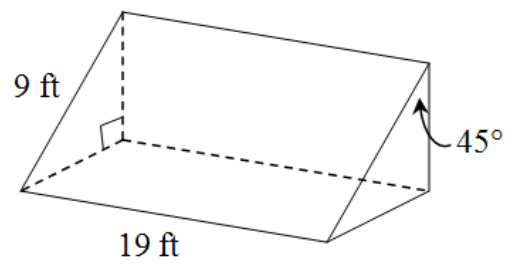


38. Find the area of a circle with a circumference of 16π .

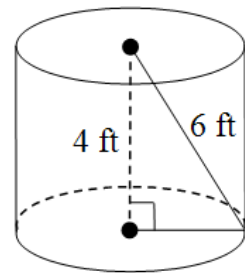
39. Find the area of the shaded region, to the nearest tenth.
Assume all polygons are regular



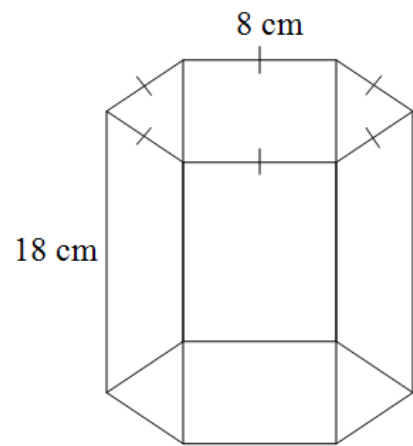
40. Find the surface area of the following solid.
Round to the nearest tenth.



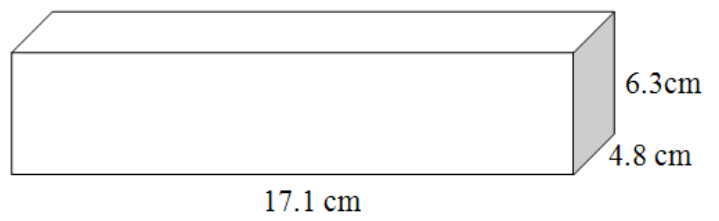
41. Find the surface area of the following solid, to the nearest tenth.



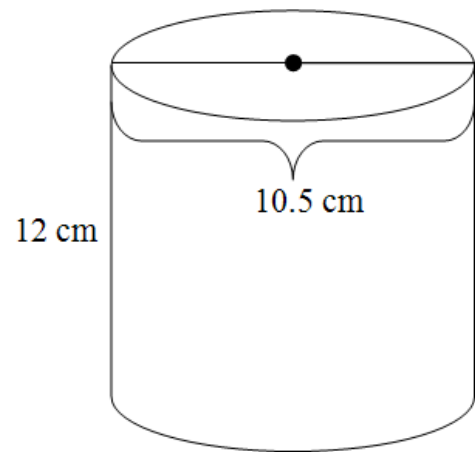
42. Find the lateral area of the following solid.
Round to the nearest tenth.



43. Find the volume of the following figure.



44. Find the volume of the following figure.



45. Find the volume of the following figure, to the nearest tenth.

