

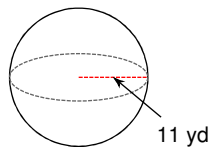
Part 2b: Volumes of 3D shapes

Date _____ Period _____

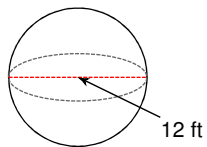
© 2013 Kuta Software LLC. All rights reserved.

Find the volume of each figure. Round your answers to the nearest hundredth, if necessary.

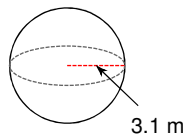
1)



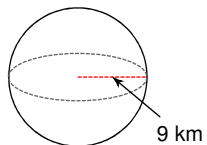
2)



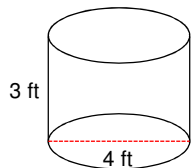
3)



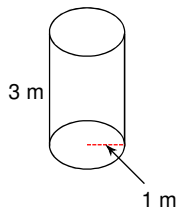
4)



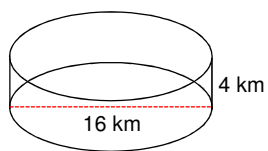
5)



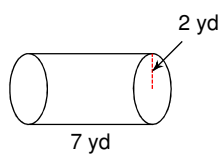
6)



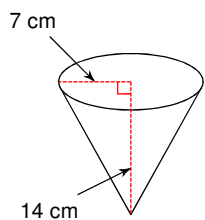
7)



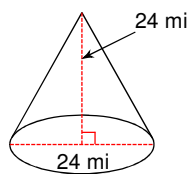
8)



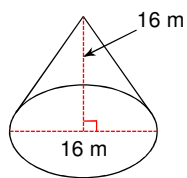
9)



10)



11)



12)

