

Distance formula in class

Date _____ Period _____

© 2013 Kuta Software LLC. All rights reserved.

Find the distance between each pair of points. Round your answer to the nearest tenth, if necessary.

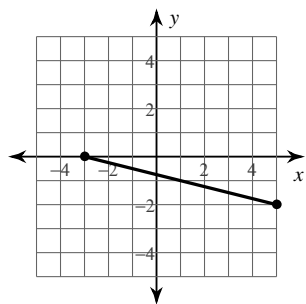
1) $(0, -5), (3, 8)$

2) $(-4, -8), (-8, -2)$

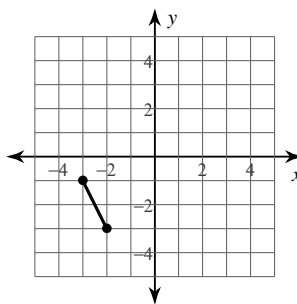
3) $(1, 5), (4, 6)$

4) $(-8, 1), (-4, -4)$

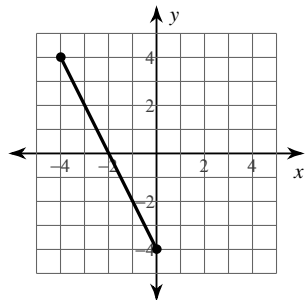
5)



6)



7)



8)

