

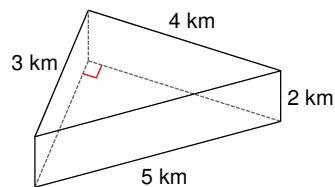
# Lateral Area and Surface Area of prisms and cylinders

Date \_\_\_\_\_ Period \_\_\_\_\_

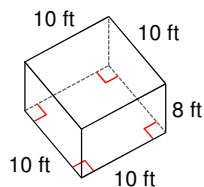
© 2014 Kuta Software LLC. All rights reserved.

**Find the lateral area and surface area of each figure. Round your answers to the nearest hundredth, if necessary.**

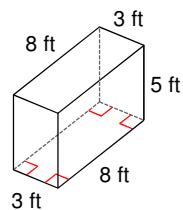
1)



2)



3)



4)

