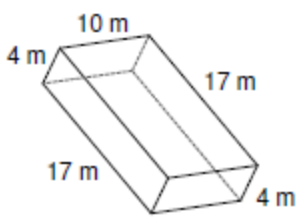
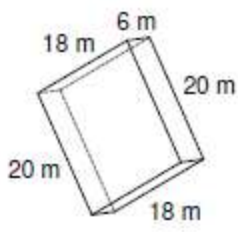
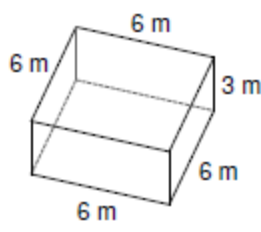
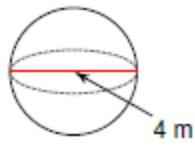
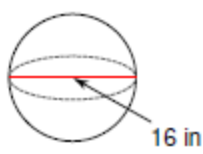


Find the surface area and volume



- 1) Find the surface area and volume of a square prism measuring 8 km along each edge of the base and 9 km tall.**

- 2) Find the surface area and volume of a rectangular prism measuring 10 m and 7m along the base and 12m tall.**

- 3) Find the surface area and volume of a sphere with a diameter of 20 yards.**

- 4) Find the surface area and volume of a hemi-sphere with a radius of 9 feet.**