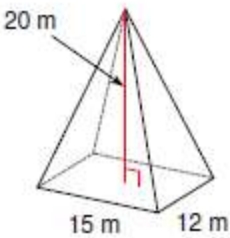
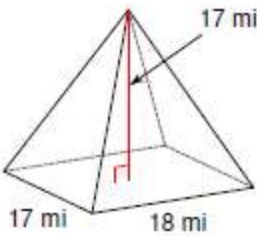
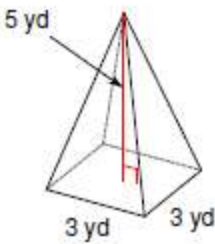
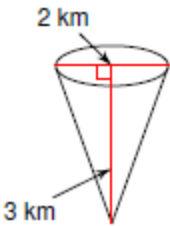
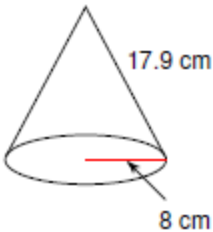
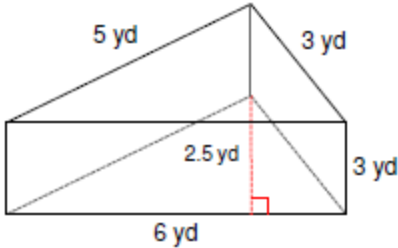
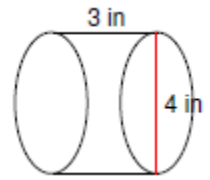
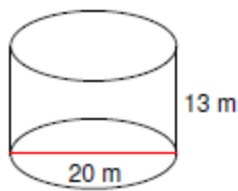
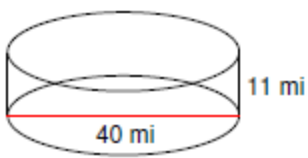


Find the surface area and volume





- 1) Find the surface area and volume of a cylinder with a radius of 3 cm and a height of 7 cm.

- 2) Find the surface area and volume of a square pyramid with a side of 6, a slant height of 5 and a height of 4 yards.

- 3) Find the surface area and volume of a cone with a diameter of 20 cm and a height of 12 cm.

- 4) Find the surface area and volume of a cone with a diameter of 10 in and a slant height of 13 cm.