

PERCENTAGE COMPOSITION

Name _____


Determine the percentage composition of each of the compounds below.



K = _____

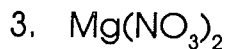
Mn = _____

O = _____



H = _____

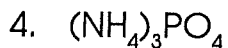
Cl = _____



Mg = _____

N = _____

O = _____

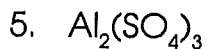


N = _____

H = _____

P = _____

O = _____



Al = _____

S = _____

O = _____

Solve the following problems.

6. How many grams of oxygen can be produced from the decomposition of 100. g of KClO_3 ? _____

7. How much iron can be recovered from 25.0 g of Fe_2O_3 ? _____

8. How much silver can be produced from 125 g of Ag_2S ? _____