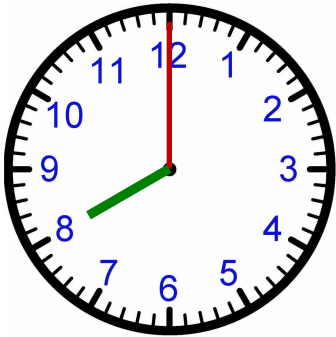


Name : _____

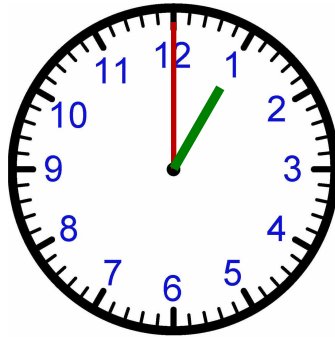
Score : _____

Teacher : _____

Date : _____



Clock A



Clock B

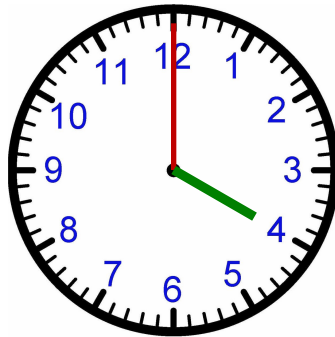
What time is on Clock A ? _____

What time is on Clock B ? _____

How much time has elapsed between Clock A and B ? _____



Clock A

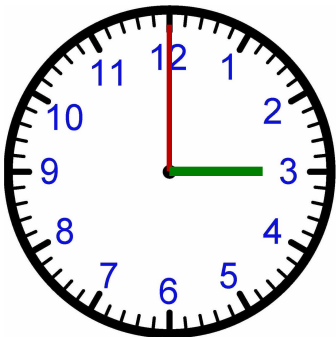


Clock B

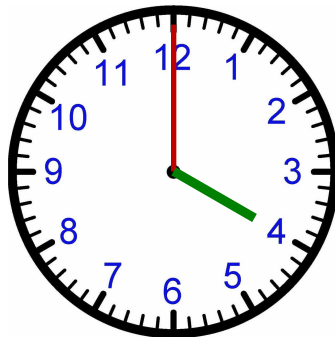
What time is on Clock A ? _____

What time is on Clock B ? _____

How much time has elapsed between Clock A and B ? _____



Clock A

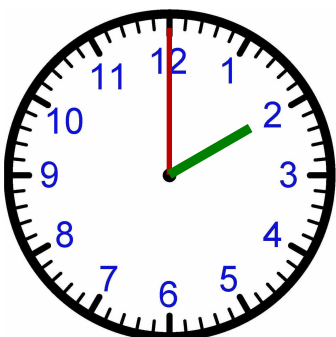


Clock B

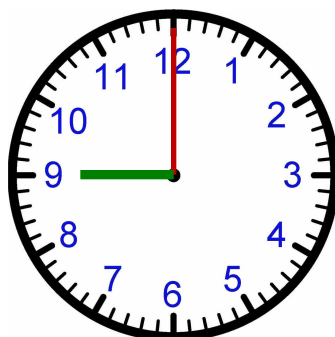
What time is on Clock A ? _____

What time is on Clock B ? _____

How much time has elapsed between Clock A and B ? _____



Clock A



Clock B

What time is on Clock A ? _____

What time is on Clock B ? _____

How much time has elapsed between Clock A and B ? _____

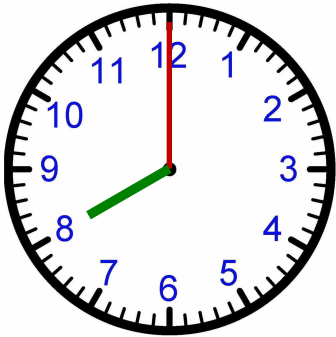


Name : _____

Score : _____

Teacher : _____

Date : _____



Clock A



Clock B

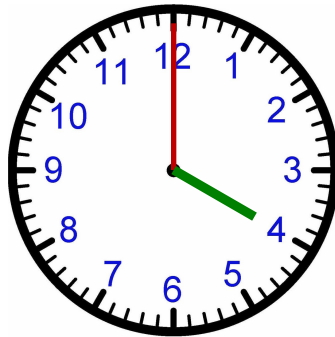
What time is on Clock A ? 8:00

What time is on Clock B ? 1:00

How much time has elapsed between Clock A and B ? 5 hrs and 0 mins



Clock A

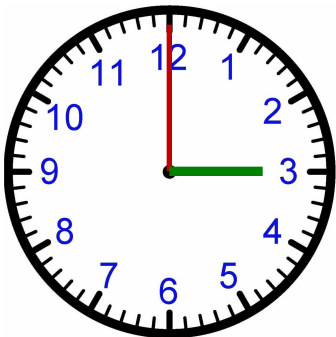


Clock B

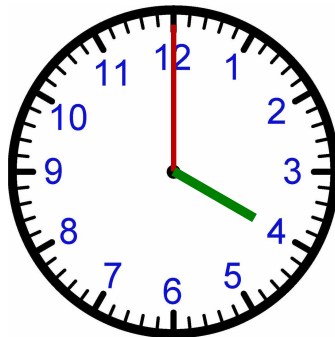
What time is on Clock A ? 2:00

What time is on Clock B ? 4:00

How much time has elapsed between Clock A and B ? 2 hrs and 0 mins



Clock A

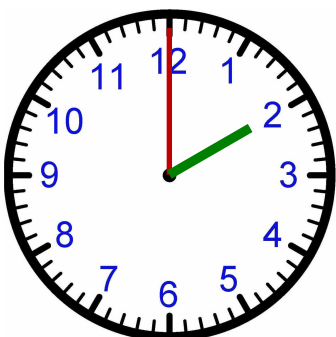


Clock B

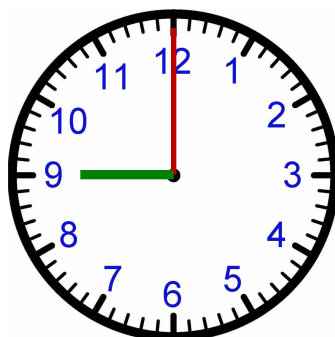
What time is on Clock A ? 3:00

What time is on Clock B ? 4:00

How much time has elapsed between Clock A and B ? 1 hrs and 0 mins



Clock A



Clock B

What time is on Clock A ? 2:00

What time is on Clock B ? 9:00

How much time has elapsed between Clock A and B ? 7 hrs and 0 mins

