

Name : _____

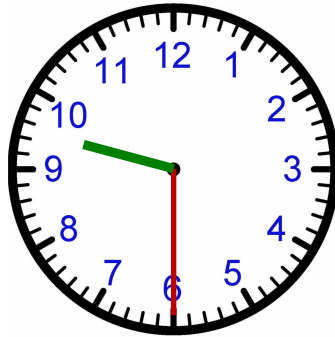
Score : _____

Teacher : _____

Date : _____



Clock A

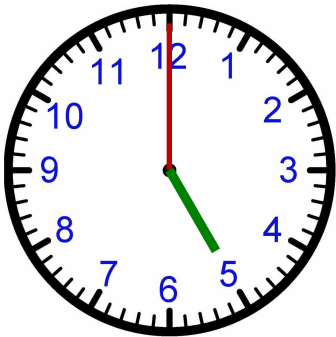


Clock B

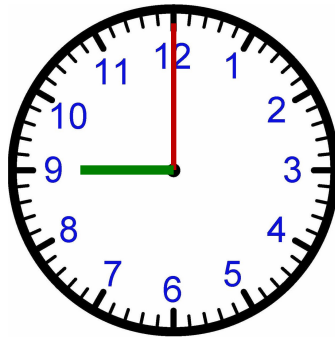
What time is on Clock A ? _____

What time is on Clock B ? _____

How much time has elapsed between Clock A and B ? _____



Clock A



Clock B

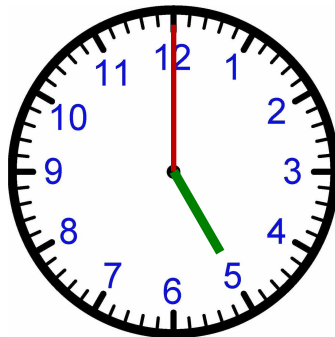
What time is on Clock A ? _____

What time is on Clock B ? _____

How much time has elapsed between Clock A and B ? _____



Clock A

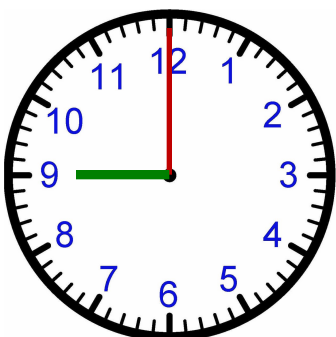


Clock B

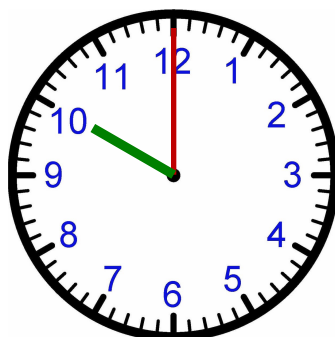
What time is on Clock A ? _____

What time is on Clock B ? _____

How much time has elapsed between Clock A and B ? _____



Clock A



Clock B

What time is on Clock A ? _____

What time is on Clock B ? _____

How much time has elapsed between Clock A and B ? _____



Name : _____

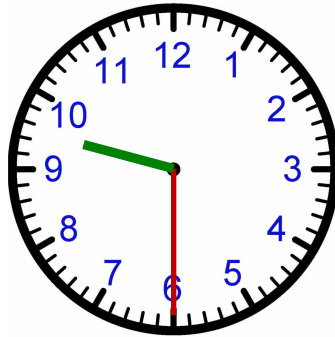
Score : _____

Teacher : _____

Date : _____



Clock A



Clock B

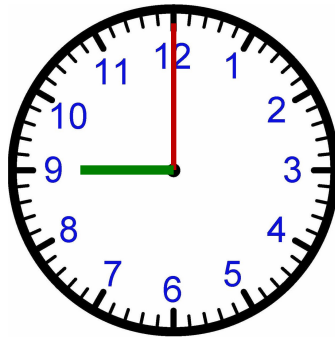
What time is on Clock A ? 1:30

What time is on Clock B ? 9:30

How much time has elapsed between Clock A and B ? 8 hrs and 0 mins



Clock A



Clock B

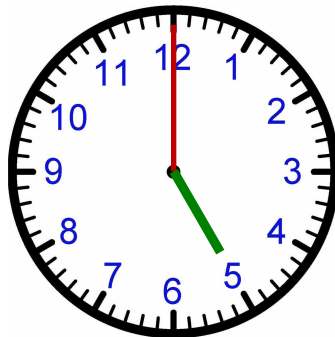
What time is on Clock A ? 5:00

What time is on Clock B ? 9:00

How much time has elapsed between Clock A and B ? 4 hrs and 0 mins



Clock A

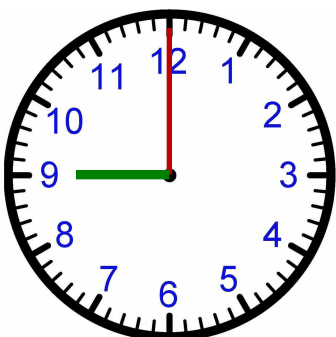


Clock B

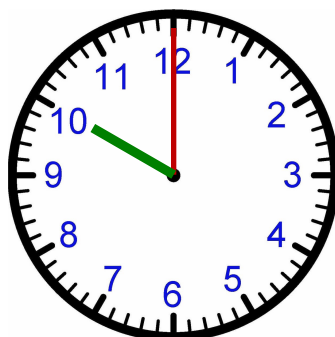
What time is on Clock A ? 4:00

What time is on Clock B ? 5:00

How much time has elapsed between Clock A and B ? 1 hrs and 0 mins



Clock A



Clock B

What time is on Clock A ? 9:00

What time is on Clock B ? 10:00

How much time has elapsed between Clock A and B ? 1 hrs and 0 mins

