

Name : \_\_\_\_\_

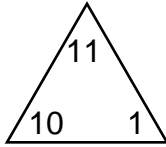
Score : \_\_\_\_\_

Teacher : \_\_\_\_\_

Date : \_\_\_\_\_

## Complete Each Family of Facts

1 )



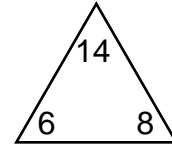
$$\square + \square = \square$$

$$\square + \square = \square$$

$$\square - \square = \square$$

$$\square - \square = \square$$

4 )



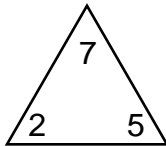
$$\square + \square = \square$$

$$\square + \square = \square$$

$$\square - \square = \square$$

$$\square - \square = \square$$

2 )



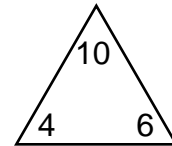
$$\square + \square = \square$$

$$\square + \square = \square$$

$$\square - \square = \square$$

$$\square - \square = \square$$

5 )



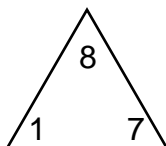
$$\square + \square = \square$$

$$\square + \square = \square$$

$$\square - \square = \square$$

$$\square - \square = \square$$

3 )



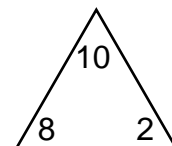
$$\square + \square = \square$$

$$\square + \square = \square$$

$$\square - \square = \square$$

$$\square - \square = \square$$

6 )



$$\square + \square = \square$$

$$\square + \square = \square$$

$$\square - \square = \square$$

$$\square - \square = \square$$



Name : \_\_\_\_\_

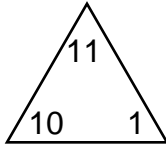
Score : \_\_\_\_\_

Teacher : \_\_\_\_\_

Date : \_\_\_\_\_

## Complete Each Family of Facts

1)



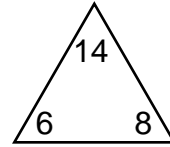
$$\boxed{10} + \boxed{1} = \boxed{11}$$

$$\boxed{1} + \boxed{10} = \boxed{11}$$

$$\boxed{11} - \boxed{1} = \boxed{10}$$

$$\boxed{11} - \boxed{10} = \boxed{1}$$

4)



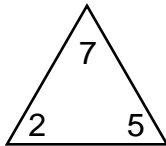
$$\boxed{6} + \boxed{8} = \boxed{14}$$

$$\boxed{8} + \boxed{6} = \boxed{14}$$

$$\boxed{14} - \boxed{8} = \boxed{6}$$

$$\boxed{14} - \boxed{6} = \boxed{8}$$

2)



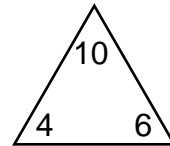
$$\boxed{2} + \boxed{5} = \boxed{7}$$

$$\boxed{5} + \boxed{2} = \boxed{7}$$

$$\boxed{7} - \boxed{5} = \boxed{2}$$

$$\boxed{7} - \boxed{2} = \boxed{5}$$

5)



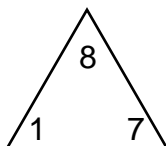
$$\boxed{4} + \boxed{6} = \boxed{10}$$

$$\boxed{6} + \boxed{4} = \boxed{10}$$

$$\boxed{10} - \boxed{6} = \boxed{4}$$

$$\boxed{10} - \boxed{4} = \boxed{6}$$

3)



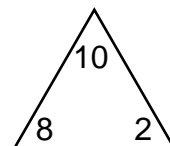
$$\boxed{1} + \boxed{7} = \boxed{8}$$

$$\boxed{7} + \boxed{1} = \boxed{8}$$

$$\boxed{8} - \boxed{7} = \boxed{1}$$

$$\boxed{8} - \boxed{1} = \boxed{7}$$

6)



$$\boxed{8} + \boxed{2} = \boxed{10}$$

$$\boxed{2} + \boxed{8} = \boxed{10}$$

$$\boxed{10} - \boxed{2} = \boxed{8}$$

$$\boxed{10} - \boxed{8} = \boxed{2}$$

