

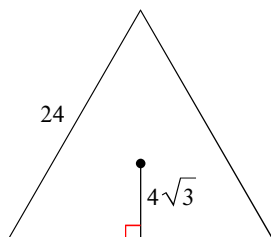
Area of Regular Polygons

© 2014 Kuta Software LLC. All rights reserved.

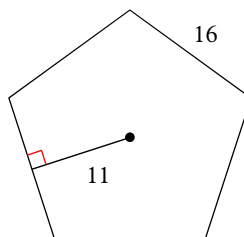
Date _____ Period _____

Find the area of each regular polygon. Leave your answer in simplest form.

1)

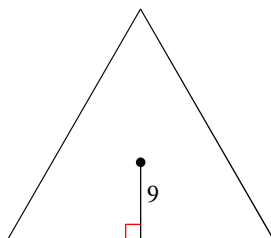


2)

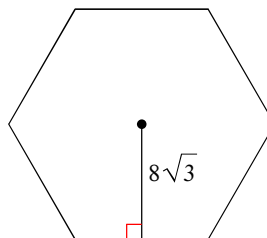


Find the area of each regular polygon. Round your answer to the nearest tenth if necessary.

3)

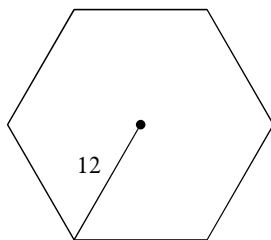


4)

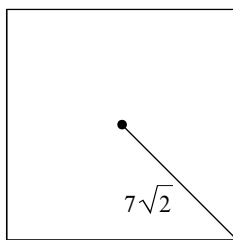


Find the area of each regular polygon. Leave your answer in simplest form.

5)

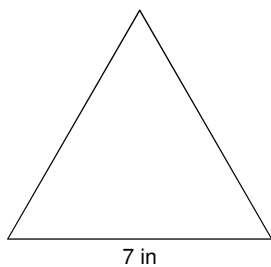


6)



Find the area of each figure. Round your answer to the nearest tenth.

7)



8)

