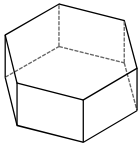


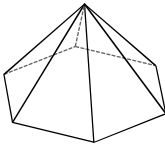
© 2014 Kuta Software LLC. All rights reserved.

Shade the base(s) of each figure. Then, name each figure. Then, give the formula to find the area of the BASE of the figure.

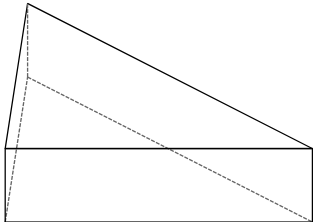
1)



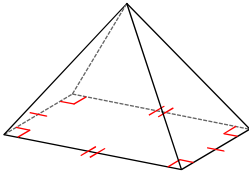
2)



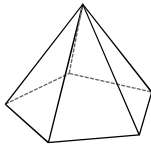
3)



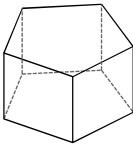
4)



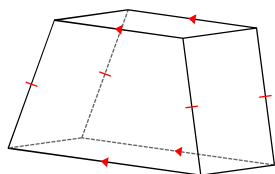
5)



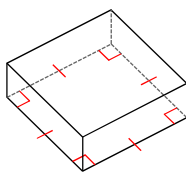
6)



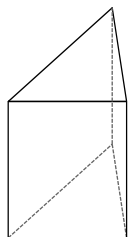
7)



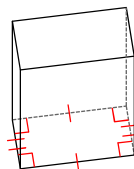
8)



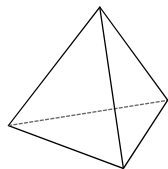
9)



10)



11)



12)

