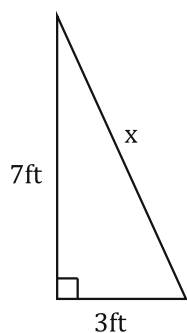
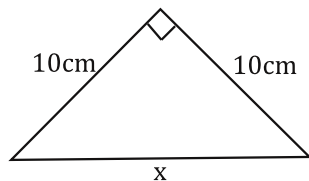


Write out the Pythagorean theorem, and solve for the missing side of each right triangle.

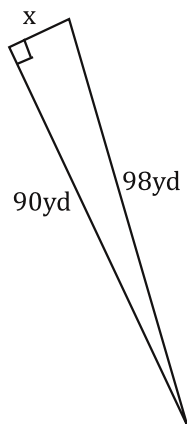
1.



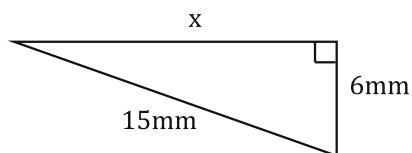
3.



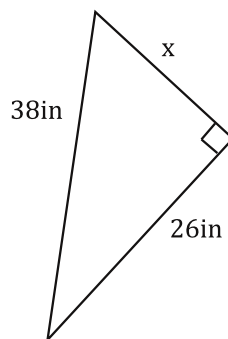
5.



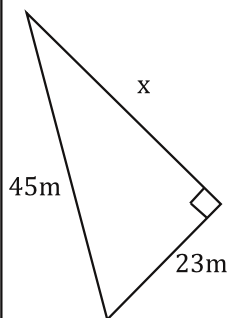
2.



4.



6.

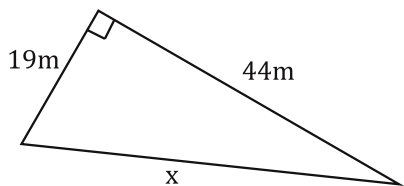


28

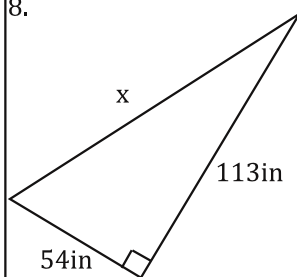
Bubble all the correct answers from above. Don't bubble incorrect answers.

- ☐ 6.7   
 ☐ 7.6   
 ☐ 38.7   
 ☐ 73.8   
 ☐ 13.7   
 ☐ 38.8   
 ☐ 14.1   
 ☐ 41.1   
 ☐ 27.7   
 ☐ 72.7

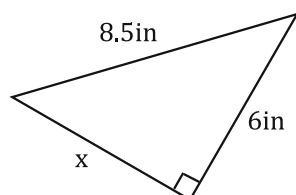
7.



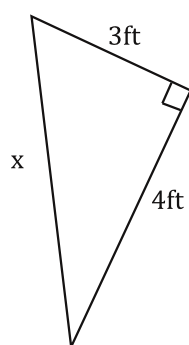
8.



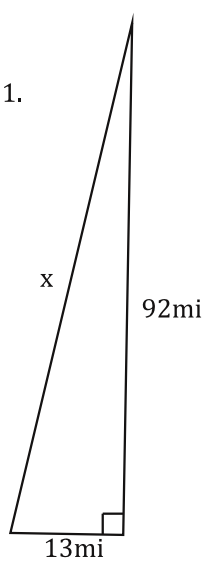
9.



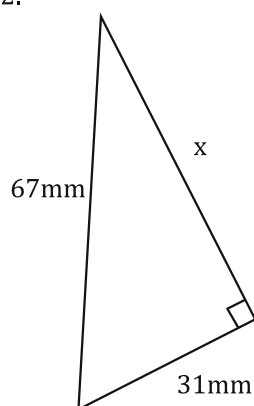
10.



11.



12.



29

Bubble all the correct answers from above. Don't bubble incorrect answers.

- ☐ 6   
 ☐ 5   
 ☐ 10.4   
 ☐ 73.8   
 ☐ 9.9   
 ☐ 92.9   
 ☐ 59.4   
 ☐ 7.7   
 ☐ 47.9   
 ☐ 125.2

For these draw a picture... it will help a lot!

13. Find the hypotenuse of a right triangle with legs 16in and 12 in long.

15. A right triangle has a hypotenuse that is 45m long and one leg that is 15m long. Find the length of the other leg.

17. Find the hypotenuse of a right triangle with legs 79cm and 55cm long.

14. Find the hypotenuse of a right triangle with legs 23in and 17in long.

16. A right triangle has a hypotenuse that is 19ft long and one leg that is 6ft long. Find the length of the other leg.

18. A right triangle has a hypotenuse that is 37mm long and one leg that is 21mm long. Find the length of the other leg.

Bubble all the correct answers from above. Don't bubble incorrect answers.

☐ 96.3    ☐ 30.5    ☐ 18    ☐ 42.4    ☐ 20    ☐ 15.5    ☐ 47.4    ☐ 5    ☐ 42.5    ☐ 28.6