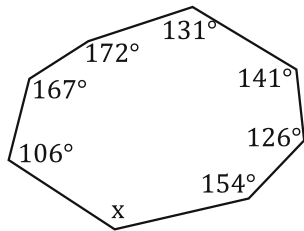
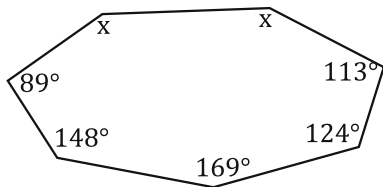


For these.... find the missing angle or angles.

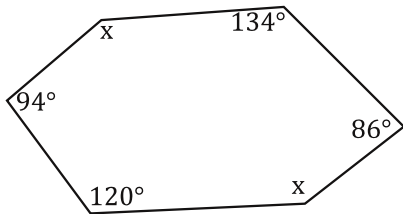
25.



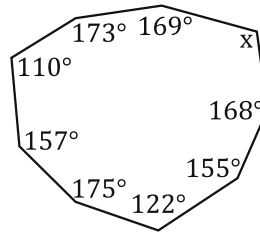
27.



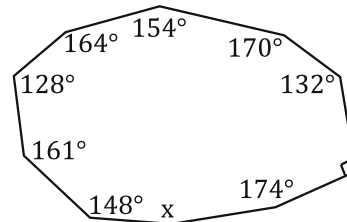
29.



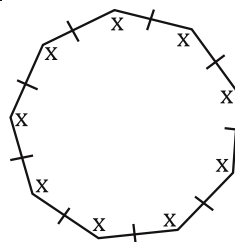
26.



28.



30.



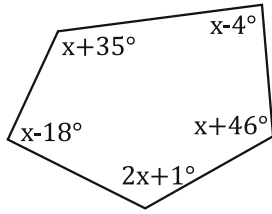
260

Bubble all the correct answers from above. Don't bubble incorrect answers.

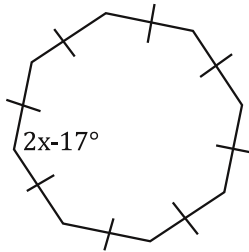
- 324.59  
  84  
  44.3  
  143  
  128.5  
  119  
  168  
  140  
  83  
  31

For these... solve for x.

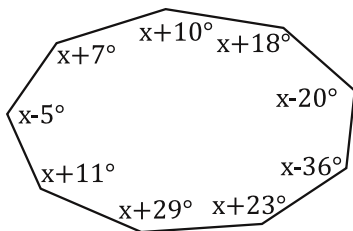
31.



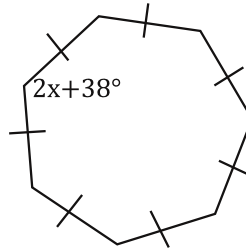
33.



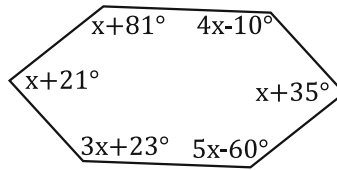
35.



32.



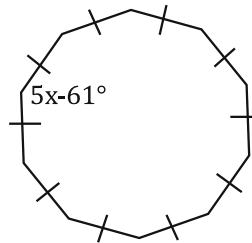
34.



$$\begin{aligned} n &= 6 \\ (n-2)180^\circ & \\ (6-2)180 & \\ 4 \cdot 180 & \\ 720^\circ & \end{aligned}$$

$$\begin{aligned} x+81+4x-10+x+35+5x-60+3x+23+x+21 &= 720^\circ \\ 15x+90 &= 720^\circ \\ -90 \quad -90 & \\ \hline 15x &= 630^\circ \\ \hline 15 \quad 15 & \\ x &= 42^\circ \end{aligned}$$

36.



Bubble all the correct answers from above. Don't bubble incorrect answers.

- 113   
  45.29   
  47.32   
  41   
  135.89   
  47   
  42   
  76   
  123.5   
  110