

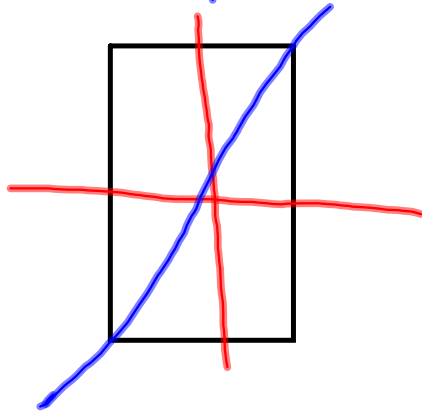
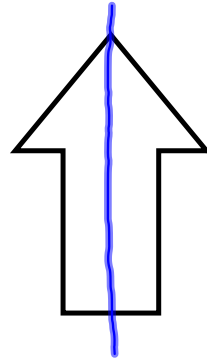
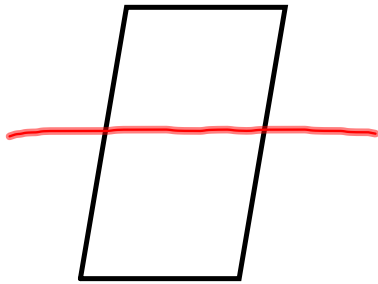
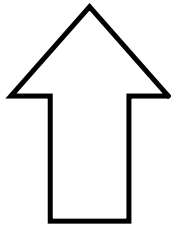
3/22/12 9.8 Line Symmetry

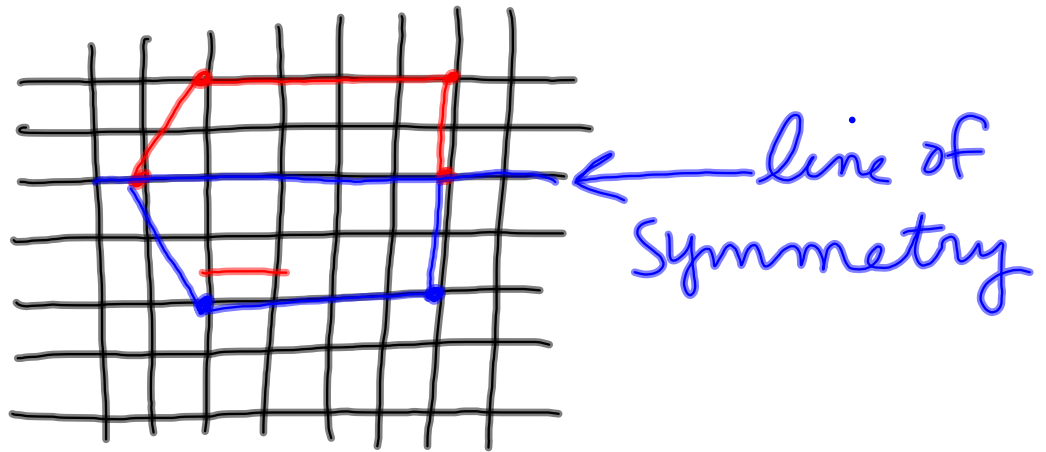
LINE SYMMETRY

a figure has line symmetry if a line can be drawn that divides the figure into two congruent parts that are mirror images of each other.

* The line is called
LINE OF SYMMETRY

P.460





In Class:

#16.~ just draw
do not cut
out.

① p. 462-463 #s 5-30

② p. 465 #s 1-10 Review
Quiz

HW: WS 9.8
#s 1-16