

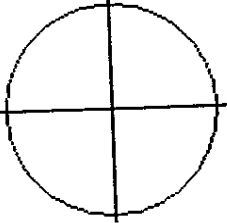
Form #147627134828
Step-By-Step

Answers
Save this Test! / Turn Into a Puzzle or Board Game!

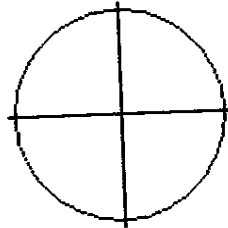
Worksheet generated by
<http://www.easyworksheets.com>
All rights reserved. Copyright 1998 Triple Threat Inc.

Solve:

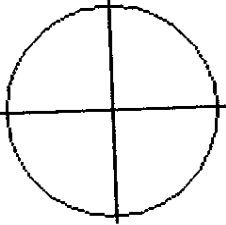
- 1) Draw 270° in standard position:



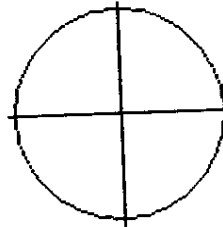
- 2) Draw $-\pi/6$ in standard position:



- 3) Draw -315° in standard position:



- 4) Draw $-\pi/4$ in standard position:



- 5) Find the reference angle for -765°
Draw the angle in standard position.

- 6) Find the reference angle for 420° .
Draw the angle in standard position.

- 7) Find a negative coterminal angle to $-19\pi/15$.

- 8) Find a negative coterminal angle to 12° .

- 9) Find a positive coterminal angle to $23\pi/15$.

- 10) Find a positive coterminal angle to $-16\pi/15$.